

**KENDRIYA VIDYALAYA YOI CANTT.**

**Session Ending Examination Sample paper ( 2017-18)**

**CLASS-III**

**SUBJECT- ENVIRONMENTAL STUDIES**

**Date: .....**

**Time: 2:30 hrs**

**Name of Student:.....**

**Roll No.:.....**

**Signature of Invigilator.....**






**Signature of Examiner.....**

**Signature of Checker.....**

<b>Competencies</b>	<b>Weightage</b>	<b>Marks</b>	<b>Grade</b>	<b>OA</b>
<b>Observation and Reporting</b>	<b>25</b>			
<b>Identification and Classification</b>	<b>25</b>			
<b>Discovering Facts</b>	<b>30</b>			

**OBSERVATION AND REPORTING**(Marks – 25) *EVS-III*

(1) Look at the pictures and match. ( 1x10=10) Marks

		Multi –storeyed building
		Hut
		House boat
		Igloo
		Tent

**f) The person who cuts our hair is called?**

**Ans-** \_\_\_\_\_

**g) The person who teaches in a school is called?**

**Ans-** \_\_\_\_\_

**h) Write the name of your favorite room in your house.**

**Ans-** \_\_\_\_\_

**i) Who eats last in your family?**

**Ans-** \_\_\_\_\_

**j) Are there utensils made of clay in your house ?**

**Ans-** \_\_\_\_\_

(2) Fill in the blanks: 1+1=2

(i) \_\_\_\_\_ guard our homes. ( cow, dog, monkey)

(ii) \_\_\_\_\_ is obtained from the hair of goat, lamb, sheep, yak  
etc. ( Cotton, wool, milk)

(3) Who takes care of Tara Ram? 2

.....  
.....

(4) Name the various source of water ? 2

.....  
.....

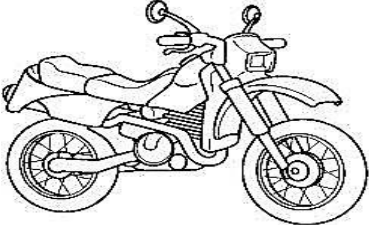




(5) Where do we feel safe? 2

.....  
.....

(6) Write five natural things. 2

(7) Observe the following pictures and write the right fuel for them.

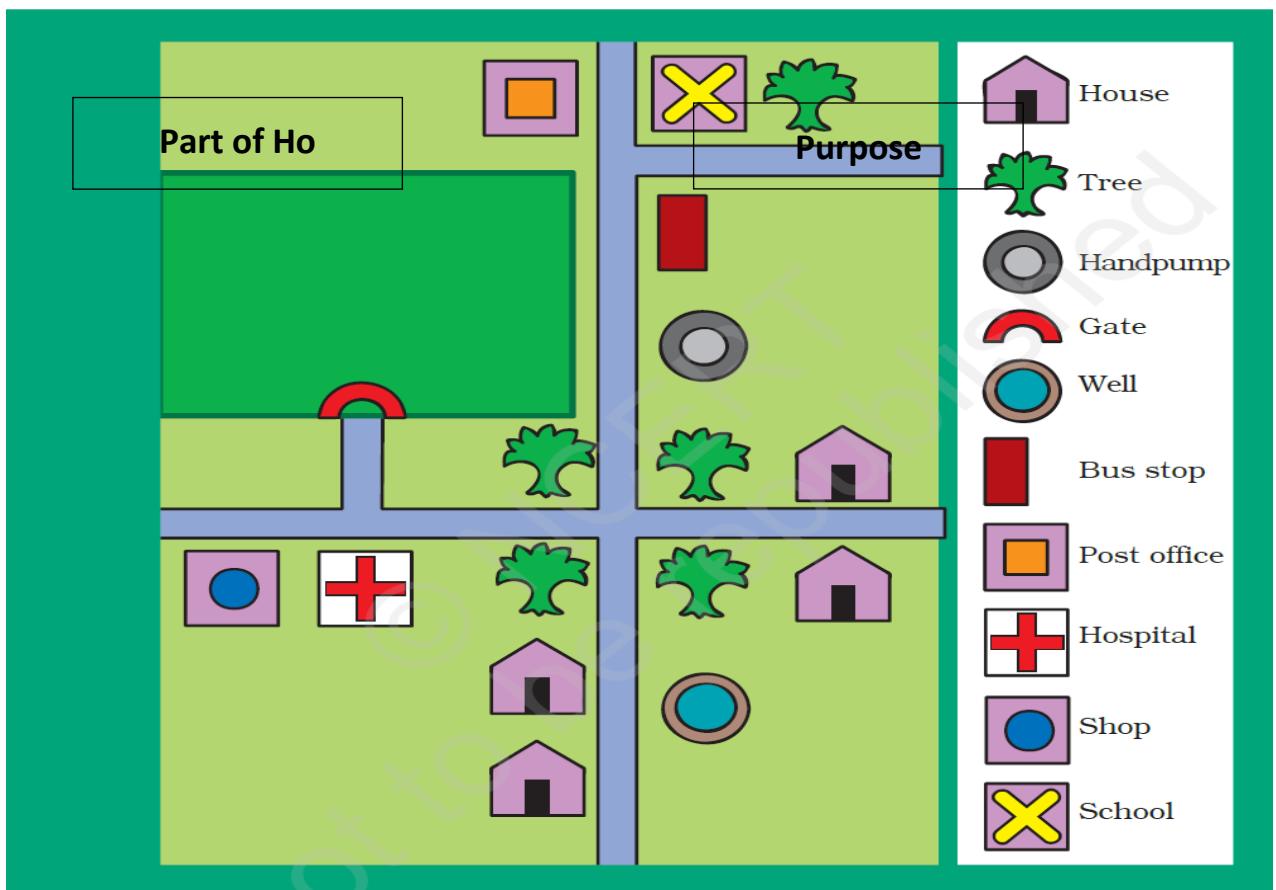
5

	<p>.....</p>
	<p>.....</p>
	<p>.....</p>
	<p>.....</p>
<p>Diesel                      Petrol                      Electricity</p>	
	<p>.....</p>

--	--

**IDENTIFICATION AND CLASSIFICATION (Marks –25)**

(1) A list of symbols used in the map is given. Look carefully and write. 5 Marks



- (A) How many houses are there in the map? \_\_\_\_\_
- (B) How many shops are there in the map? \_\_\_\_\_
- (C) How many trees are there in the map? \_\_\_\_\_
- (D) How many pumps are there in the map? \_\_\_\_\_
- (E) What is near the bus stop? \_\_\_\_\_

f) Fill in the blanks :

(A) The Sun rises in the .....

(B) The Sun sets in the .....

(C) Our earth rotates from .....

(D) I write with my ..... hand.

(E) We eat with our .....hand. ( 1x10=10)

Answer the following:- 2x5=10

1) Name the various source of water? 2

.....  
.....

2)Which is the fastest means of communication: (tick the correct answer)

Post card _____	Telephone _____
Mobile _____	Telegram _____

3)Enlist the materials used for making a pucca house. 2

1.....2.....  
...3.....4.....  
.....

4)What is map?

2

.....  
.....

5)Why do we need water?

2

.....  
.....

**Q--Match the following: (5)**

<b>S.No.</b>	<b>Work</b>	<b>What they are called</b>
1.	Mends shoes	Mechanic
2.	Treats Patients	Driver
3.	Drives a vehicle	Teacher
4.	Repairs vehicles	Cobbler
5.	Teaches in the school	Doctor

***DISCOVERY OF FACTS (30 Marks )***

***VSA(I\*10)***

1. Q- Put "T for true and "F" for false statement: 10Marks

- (i) In winter we wear dresses made of wool and woolen clothes. \_\_\_\_\_
- (ii) In hot climates, dark and thick clothes are suitable. \_\_\_\_\_
- (iii) We look smart in clothes. \_\_\_\_\_
- (iv) In winters, light and loose clothes are suitable. \_\_\_\_\_
- (v) Threads are woven to make a cloth. \_\_\_\_\_

(vi) We get honey from honeybee. \_\_\_\_\_

(vii) Ludo is an outdoor game. \_\_\_\_\_

(vii) We should not play games. \_\_\_\_\_

(viii) We should not hurt the feelings of others. \_\_\_\_\_

(ix) New Delhi is the capital of India. \_\_\_\_\_

(x) We should not tease animals. \_\_\_\_\_

SA(2x5=10)

Q2-Name three food items we get from animals. 2

1.....2.....3.....

(F) Draw 2 man-made things and write their name. 2




(G) Make your family- tree below ?

2



(H) With whom do you talk on the telephone?

1.....2.....  
...3.....4.....

(O) Write name four directions.

2

1----- 2 -----  
3----- 4 -----

**LA(2x5=10)**

**1.What do these symbols stand for?(5)**





