



KENDRIYA VIDYALAYA YOL CANTT

SUMMATIVE ASSESSMENT-II (SAMPLE PAPER)

Class: III

Section: _____

Subject: EVS

Time: 2 Hours

Date : _____

Name of the Student: _____

Roll No: _____

Competencies	Observation and Reporting(20)	Identification and classification(20)	Discovery of Facts(20)	Overall(60)
Grade				

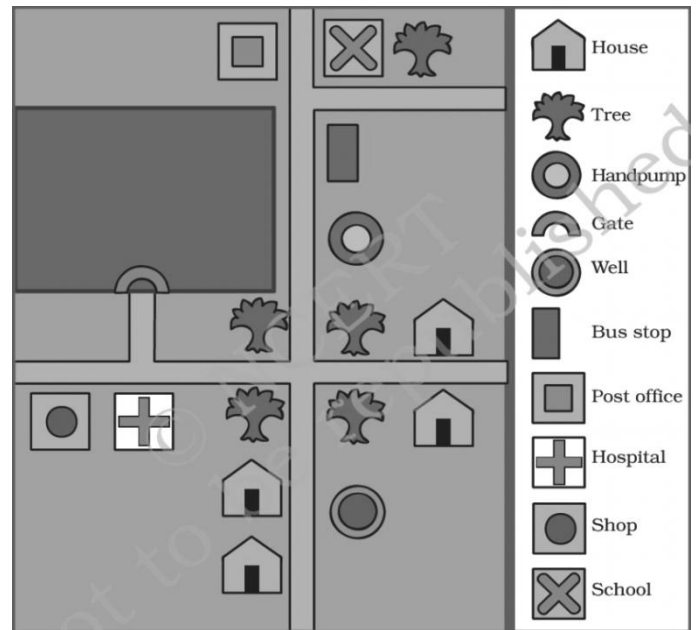
Signature of the InvigilatorSignature of the Evaluator

OBSERVATION

1. Observe the pictures and answer the following questions.

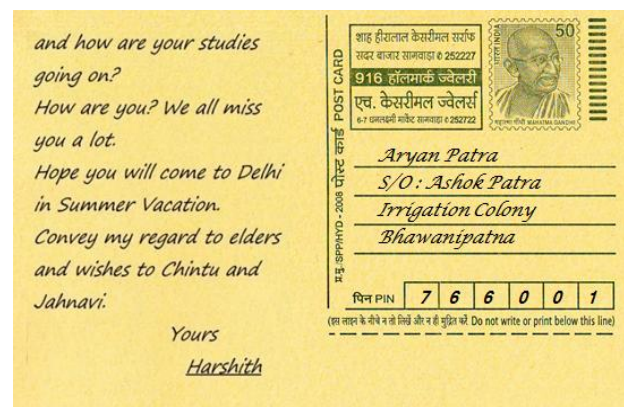
VSA

- a. How many hand pumps are there in the map? Ans: _____
- b. How many trees are there in the map? Ans: _____
- c. What is near to the shop? Ans: _____
- d. Is the bus stop closer to the school or to the hospital?



- Ans: _____
- e. Who has written this letter?
- Ans : _____
- f. To whom has it been written?
- Ans : _____

g. What is the PIN written on the post card?

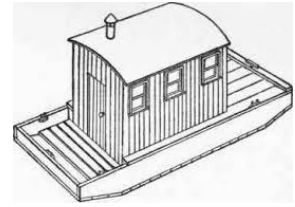


Ans _____

2. Answer the following questions.

(SA)

a. i) Name the picture. Ans _____



ii) How is it different from our house ?


b.i) Name the game. Ans _____



ii) What type of game is it?

Ans _____ (indoor/outdoor)


c. i) Name the animal. Ans _____



ii) What does it eat?

Ans _____


d.i) Name the picture. Ans _____



ii) Which part of the plant is it?

Ans: _____

3. Name this script. Write a few sentences about the script. (LA)



IDENTIFICATION AND CLASSIFICATION

1. Choose the correct option and fill in the blanks. (VSA)

a. _____ is an indoor game. (Ludo, Cricket, Football)

b. The food item that we get from plant is _____.

(egg, milk, potato)

c. The person who repairs cars and scooter is called _____.

(blacksmith, goldsmith, mechanic)

d. We take _____ when we have a toothache. (ajwain, clove, tulsi)



e. The sense organ which helps us smell is _____.

(nose, tongue, ear)



2. Answer the following: (SA)

a. Draw and write the uses of:

(i) Flower pot -



(ii) Diya -



b. Name four animals that we can not touch.

c. Write the names of four means of communication.

d. Write the names of things required to play the following games.

Cricket- _____

Carrom- _____

e. Write true or false against the following statements.

(i) The family members love each other very much. []

(ii) Lion is a pet animal that we keep in our house. []

3. Classify the following animals based on what they eat. (LA)

(Cow, Tiger, Wolf, Deer, Elephant, Hyena, Goat, Zebra, Leopard, Lion)

FLESH EATERS	PLANT EATERS

DISCOVERY OF FACTS

1. What do these symbols stand for?

(VSA)







2. Answer these following questions.

a. What type of clothes do you wear in summer?

b. Name the materials that are needed to build a house.

c. From which animals do we get the following?

Wool	
Milk	
Honey	
Egg	

d. Write names of four unstitched clothes.

e. Draw a food chain using the following.

Grass, Snake, Eagle, Frog, Grasshopper

