

**KENDRIYA VIDYALAYA YOL CANTT**

**SAMPLE PAPER**

**FORMATIVE ASSESSMENT – 3      2016-17**

Class: V

Subject :EVS

Time : 1HR 30m

Name : ..... DATE ..... Roll No: .....

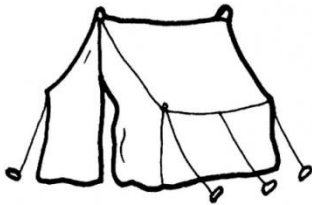
COMPE.	OBS(10)	ID (15)	D.O.F(15)	TOTAL
MARKS				
GRADE				

Checker : ..... Invig: .....

**OBSERVATION - 10**

**VSA - 1 X 6**

Q1. A) OBSERVE THE FOLLOWING PICTURES AND WRITE IN ONE WORD OR IN A SENTENCE WHAT YOU OBSERVED



It is a \_\_\_\_\_.



It is a \_\_\_\_\_.



It is a \_\_\_\_\_ shawl



it is a \_\_\_\_\_

b) What is going on in the pictures given below



she is \_\_\_\_\_

---



He is \_\_\_\_\_

---

**SA - 2 X 2**

Q2. Name two states of India that have oil fields .

\_\_\_\_\_

Q3. How **Bakarwal** people are different from **Changpas** ?

\_\_\_\_\_  
\_\_\_\_\_  
\_\_\_\_\_

**IDENTIFICATION – 15**

**VSA 1X4**

Q1. Name two activities that you do by blowing air from your mouth

\_\_\_\_\_

Q2. Who fought for the justice for the people of lower caste.

\_\_\_\_\_

Q3. What kind of help would people need after an Earthquake?

---

Q4. What kind of fuel is used for vehicles ?

---

**SA - 2 X 3**

Q5. What are the number for

FIRE STATION \_\_\_\_\_ AMBULANCE \_\_\_\_\_

Q6. Suggest two ways to save petrol .

---

---

Q7. What is an earthquake ?

---

---

Q8. What kinds of work or jobs do people not want to do ?

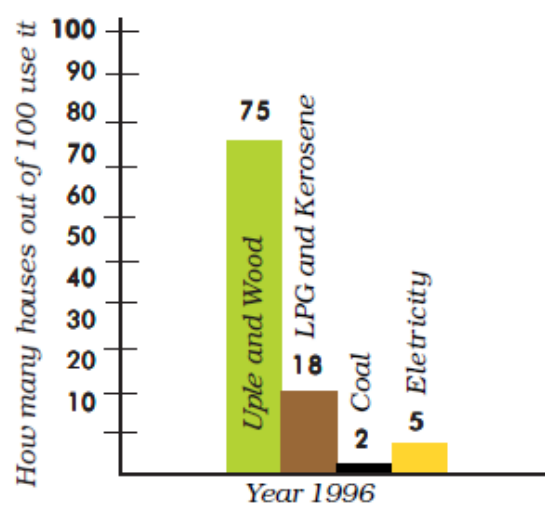
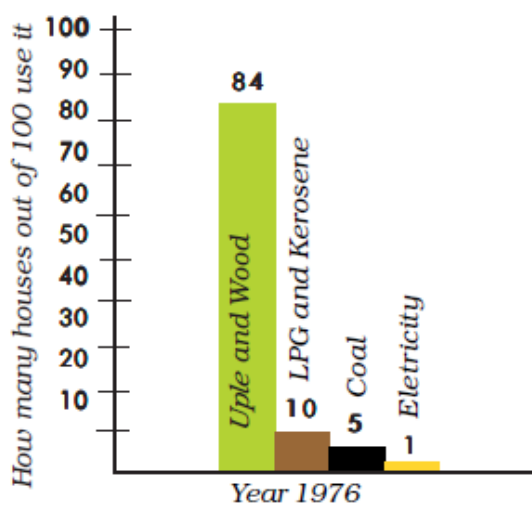
---

---

**LA - 5 x 1**

Q9. Observe the following and answer the following questions

**Change in fuel use over twenty years**



1. Which was the fuel used the least in 1976 \_\_\_\_\_
2. Out of 100 how many houses were using electricity in 1996 \_\_\_\_\_
3. Which was the fuel used the most in 1976 \_\_\_\_\_
4. In 1976 how many houses were using coal \_\_\_\_\_
5. In 1996 how many houses were using LPG and kerosene \_\_\_\_\_

**DISCOVERY OF FACTS - 15**

**VSA 1 X 6 (½ x 12 = 6)**

Q1. FILL IN THE BLANKS FROM THE WORDS GIVEN BELOW

Earthquake	petrol	loner	26 jan
Sheeps	been	goats	flute
Flood	stethoscope	sweeper	deisel

1. Name of the motorcycle of Gaurav Jani is \_\_\_\_\_
2. A scooter uses \_\_\_\_\_ and a bus uses \_\_\_\_\_ as fuel.
3. Gujarat was hit by an \_\_\_\_\_ on \_\_\_\_\_ 2001
4. Lekha is a place where Changpas keep their \_\_\_\_\_ and \_\_\_\_\_
5. We can play \_\_\_\_\_ and \_\_\_\_\_ by our mouth.
6. A \_\_\_\_\_ does the cleaning in our school .
7. \_\_\_\_\_ is used to count our heart beat .
8. \_\_\_\_\_ is also a natural calamity .

**SA 2 X 2**

Q2. Why did Gandhiji and his team start doing the job of cleaning ?

---



---



---

Q3. Compare your house with that of Jasma ?

---

---

---

**LA 5 X 1**



Mark and write below the names of any five states which one would pass while travelling from Mumbai to Kashmir

---

---

---